



CONSTRUCTION
INDUSTRY COUNCIL
建造業議會

Marble Worker (Wet Fixing) Trade Test Mock Written Test Paper

此文件關於雲石工（濕掛）技能測試考題。如有需要索取此文件的中文版本，請致電 2100 9000 與香港建造業工藝測試中心聯絡。

Disclaimer

No part of this material may be reproduced or transmitted in any form or any means without the written permission of the CIC. Whilst reasonable efforts have been made to ensure the accuracy of the information contained in this material, the CIC nevertheless would encourage readers to seek appropriate independent advice from their professional advisers where possible and readers should not treat or rely on this material as a substitute for such professional advice for taking any relevant actions.

Enquiries

Enquiries on this Material may be made to the Hong Kong Construction Industry Trade Testing Centre at:

95, Yue Kwong Road
Aberdeen
Hong Kong

Tel: (852) 2100 9000

Fax: (852) 2100 9090

Email: enquiry@cic.hk


Website: www.cic.hk

© 2021 Construction Industry Council.

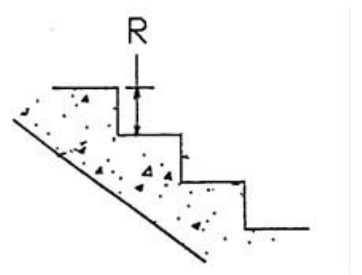
1. What is the function of safety shoes?
 - a. Improve personal outlook
 - b. To protect the foot from skin disease
 - c. Increase walking/running speed
 - d. Protect the foot

2. In case of foreign object in the eye, what action should take?
 - a. Use uncleaned hand to remove the foreign object out of the eye
 - b. Use clear water to flush the foreign object out of your eye
 - c. Wear the safety goggles immediately
 - d. Close the eye and seek for help

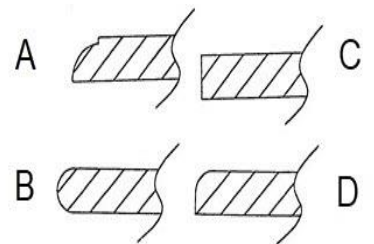
3. Which of the following symbol represents level?
 - a. A
 - b. B
 - c. C
 - d. D



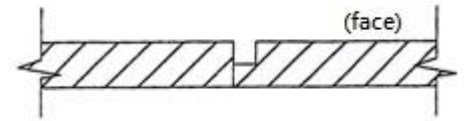
4. The indicated part of staircase R in the figure refers to the:
 - a. Step
 - b. Side
 - c. Nosing
 - d. Riser



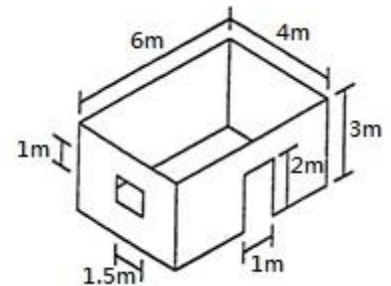
5. Which of the following figures shows the full bullnose edge (棋子邊) of a marble workpiece?
 - a. A
 - b. B
 - c. C
 - d. D



6. The marble joint shown in the figure below is a:
- Rounded joint
 - Bevel joint
 - False marble angle
 - Ordinary joint



7. Refer to the diagram below. The total net area of the interior walls is:
- 50.5m^2
 - 54.5m^2
 - 56.5 m^2
 - 60.0m^2



8. The property of Dark Green marble is that it is:
- Hard
 - Fragile
 - Prone to color bleeding
 - Prone to curling when it is in contact with grout
9. Stone flaming is applicable to:
- Granite
 - Marble
 - Sandstone
 - Slate
10. What kind of stone is Thassos?
- Sandstone
 - Agglomerated stone
 - Marble
 - Granite

11. How much space (泥位) is usually needed for paving marble panels?
 - a.20mm
 - b.40mm
 - c.60mm
 - d.80mm

12. Which kind of metal wires is usually used to make the hook for marble panels?
 - a.Iron wire
 - b.Copper wire
 - c.Steel wire
 - d.Silver wire

13. What is a "live hook"?
 - a.Hook that does not connects to the wall
 - b.Hook that connects that marble panels to the wall
 - c.Hook that connects the marble panels to each other
 - d.Hook that connects the marble panels to the slab

14. What is the criterion of placing a live hook when installing marble panels on a wall?
 - a.Perpendicularly
 - b.Parallelly
 - c.In A-shape
 - d.In a cross

15. A person should be serious at work and should uphold work ethics, including:
 - a.Accepting money and other advantages
 - b.Appropriation of other's property
 - c.Craving for personal interest and neglecting the damages dealt to others
 - d.Integrity that a person shall never accept illegal advantage and responsibility

16. What should be proper attitude towards the boss at work?
- a. Irrespect to the supervisor and perform whatever you like
 - b. Sought for higher job position by pleasing the supervisor, but poor work attitude and work quality
 - c. Realize the job requirements, follow your supervisor instruction and seek for advice if any queries
 - d. Hardworking but ignore the instruction given by the supervisor
17. The best way to reduce the wastage of cement mortar is:
- a. Apply a thinner layer of mortar
 - b. Prepare a proportion enough of an hour of use
 - c. Prepare a proportion enough of a day of use
 - d. Use more sand and less cement for mixing
18. Which of the following materials should be used together with the polishing powder for marble polishing?
- a. Oxalic acid
 - b. Ammonia Carbonate
 - c. Lime
 - d. Sulfuric acid
19. The diameter of the disc commonly used in portable grinding machine is:
- a. 100 mm
 - b. 200 mm
 - c. 300 mm
 - d. 400 mm
20. What is the roughest dry or water sandpaper?
- a. 0 grit
 - b. 240 grit
 - c. 200 grit
 - d. 400 grit

- End of Paper -